

MATHEMATICS


01. The numeral for sixty crore two thousand is

- A. 602000 B. 60002000 C. 600020000 D. 600002000

02. Khalid wants to buy a board game that costs ₹501. He has ₹479.

The money he needs to buy the board game is

- A. ₹22 B. ₹52 C. ₹65 D. ₹85



03. Seetha had 6 apples. She wants to share the apples with three of her friends. The fraction of apple each one will get including Seetha is

- A. $2\frac{1}{2}$ B. $2\frac{1}{4}$ C. $3\frac{1}{3}$ D. $1\frac{1}{2}$

04. The decimal representation of the shaded part in the following figure is



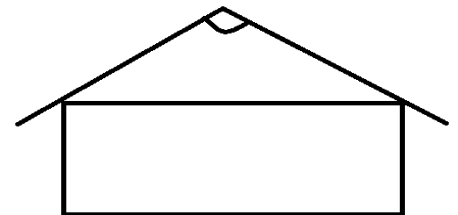
- A. 0.6 B. 0.3 C. 0.03 D. 1.2

05. The length of the side of a square stamp with an area of 4sq.cm is

- A. 2 cm B. 8cm C. 16cm D. 3cm



06. Joseph identifies the angle at the peak of the roof as shown in the adjoining figure. The type of angle is




- A. Right B. Obtuse C. Acute D. Straight

07. Sundar has to pay the shopkeeper ₹.56.75 for buying a pencil box. He gives the shopkeeper one 20 rupee note, two 10 rupee notes, two five rupee coins and four 2 rupee coins. The amount of money he gets back is

- A. ₹ 1.75 B. ₹ 1.25 C. ₹ 2.25 D. ₹ 2.50

08. The number of lines of symmetry for the adjoining figure is


- A. 2 B. 3 C. 5 D. 1



09. Arun bought a bike for ₹56,750 and sold for ₹ 58,000. The profit he made is

- A. ₹3,750 B. ₹3,760 C. ₹3,250 D. ₹1,250

10. Asti wants to put border for the favourite picture drawn by her with colour tape as shown below. The amount of colour tape needed is



- A. 55cm B. 44cm C. 65cm D. 120cm

The members lend books from the Master Mind Library. The pictograph shows the number of books checked out in five days. Use the information from the table to answer questions 21 and 22.

Library	
Day	Number of Books Checked Out
Monday	
Tuesday	
Wednesday	
Thursday	
Friday	



11. The number of books checked out on Monday than Friday is

- A. 7 B. 14 C. 1 D. 15

12. Number of books checked out on Wednesday is

- A. 14 B. 7 C. 21 D. 42